

B.Sc Semester V (CBCS) Honours Practical Examination, 2020

Subject: Zoology

Paper: ZOOA-DSE(A)-5-1-P, PARASITOLOGY

LINK FOR GOOGLE FORM SUBMISSION

<https://forms.gle/Y2dDwMjEMaynAWys6>

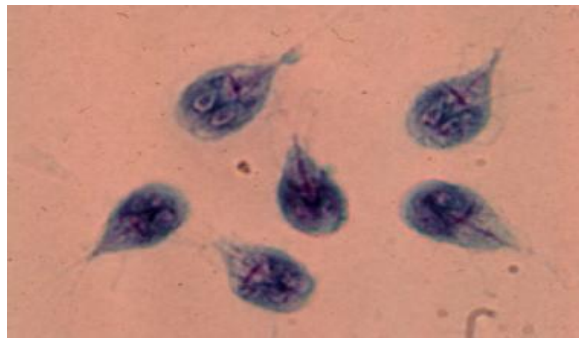
Full Marks = 30

The figures in the margin indicate full marks.

*Candidates are required to give their answers in their own words
as far as practicable.*

1. Identify with reasons the life stages of the parasite through photographs. (4 + 1 = 5) X 3 = 15

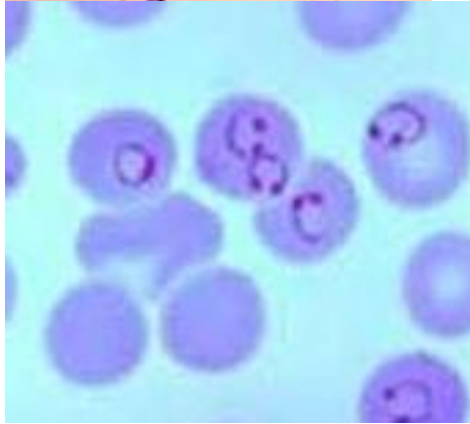
A.



B.



C.




2. Identify with reasons the life stages of the parasite through photographs. (4 + 1 = 5 X 2 = 10)

A.



B.



3. Identify with reasons the life stages of the parasite through photograph

(4 + 1 = 5)

A.

